

# Math Worksheets

## Telling Time

1) What time is shown by this clock?

\_\_\_\_\_



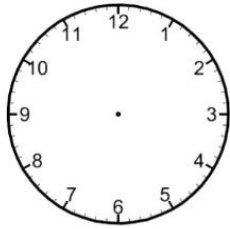
2) It is night. What time is shown on this clock?

\_\_\_\_\_



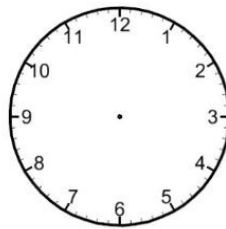
~~2)~~ Draw the hands on the clock face.

3)



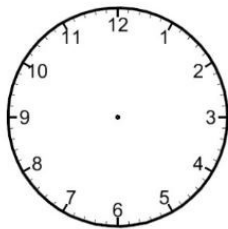
.....04:55.....

4)



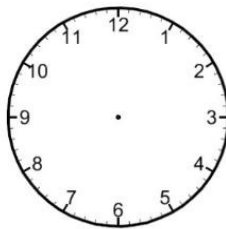
.....11:10.....

5)



.....10:40.....

6)



.....09:15.....

## Answers of Worksheets

### Telling Time

1) 5:05

2) 8:20

3)



4)



5)



6)

