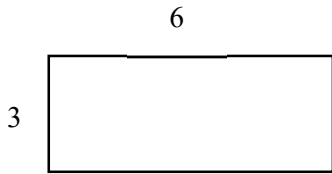


# Math Worksheets

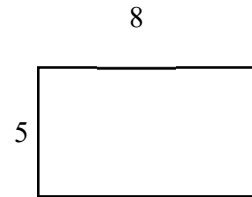
## Perimeter and Area of rectangles

✂ Find perimeter and area of rectangles.

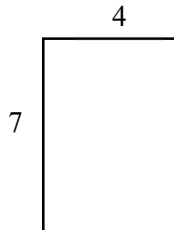
1) A: \_\_\_\_\_, P: \_\_\_\_\_



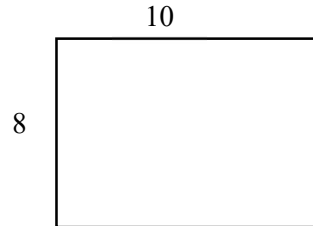
2) A: \_\_\_\_\_, P: \_\_\_\_\_



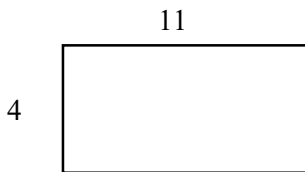
3) A: \_\_\_\_\_, P: \_\_\_\_\_



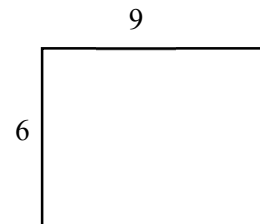
4) A: \_\_\_\_\_, P: \_\_\_\_\_



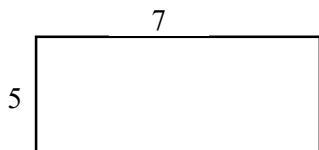
5) A: \_\_\_\_\_, P: \_\_\_\_\_



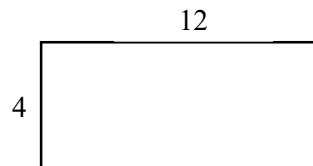
6) A: \_\_\_\_\_, P: \_\_\_\_\_



7) A: \_\_\_\_\_, P: \_\_\_\_\_



8) A: \_\_\_\_\_, P: \_\_\_\_\_



## Answers of Worksheets

### Perimeter and Area of rectangles

1) A: 18, P: 18

4) A: 80, P: 36

7) A: 35, P: 24

2) A: 40, P: 26

5) A: 44, P: 30

8) A: 48, P: 32

3) A: 28, P: 22

6) A: 54, P: 30