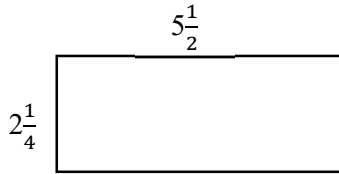


Math Worksheet

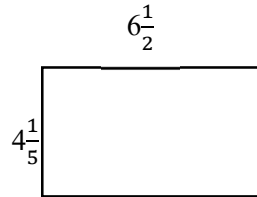
Perimeter and Area of rectangles

✂ Find perimeter and area of rectangles.

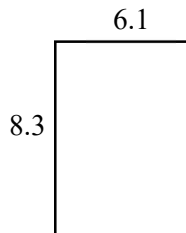
1) A: _____, P: _____



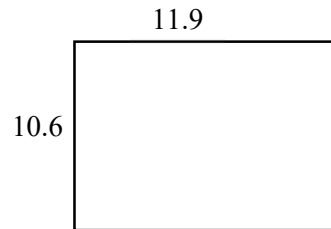
2) A: _____, P: _____



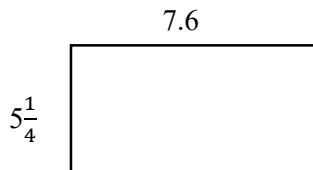
3) A: _____, P: _____



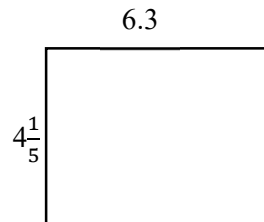
4) A: _____, P: _____




5) A: _____, P: _____




6) A: _____, P: _____



7) A: _____, P: _____



8) A: _____, P: _____



Answers of Worksheets

Perimeter and Area of rectangles

1) A: 12.375, P: 15.5

4) A: 126.14, P: 45

7) A: 33.95, P: 26.4

2) A: 27.3, P: 21.4

5) A: 39.9, P: 25.7

8) A: 66.12, P: 34.4

3) A: 50.63, P: 28.8

6) A: 26.46, P: 21