

Math Worksheets

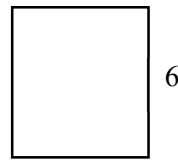
Perimeter and Area of Squares

✂ Find perimeter and area of squares.


1) A: _____, P: _____



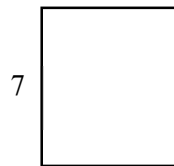
2) A: _____, P: _____




3) A: _____, P: _____



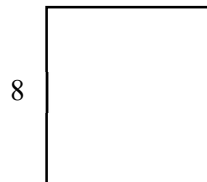
4) A: _____, P: _____



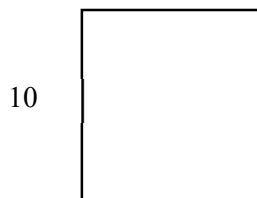
5) A: _____, P: _____




6) A: _____, P: _____



7) A: _____, P: _____



8) A: _____, P: _____



Answers of Worksheets

Perimeter and Area of Squares

1) A: 9, P: 12

4) A: 49, P: 28

7) A: 100, P: 40

2) A: 36, P: 24

5) A: 16 P: 16

8) A: 81, P: 36

3) A: 25, P: 20

6) A: 64, P: 32