
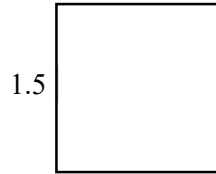


Math Worksheet

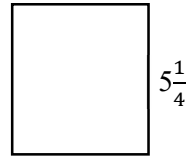
Perimeter and Area of Squares

 Find perimeter and area of squares.

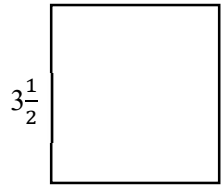
1) A: _____, P: _____



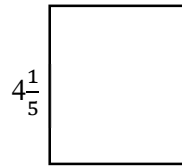
2) A: _____, P: _____



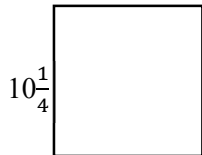
3) A: _____, P: _____



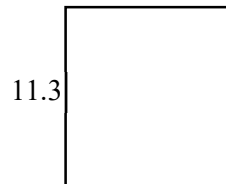
4) A: _____, P: _____



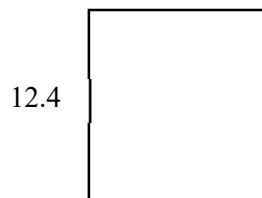
5) A: _____, P: _____



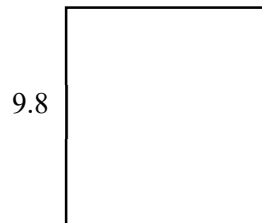
6) A: _____, P: _____



7) A: _____, P: _____



8) A: _____, P: _____



Answers of Worksheets

Perimeter and Area of Squares

1) A: 2.25, P: 6

4) A: 17.64, P: 16.8

7) A: 153.76, P: 49.6

2) A: 27.56, P: 21

5) A: 105.063 P: 41

8) A: 96.04, P: 39.2

3) A: 12.25, P: 14

6) A: 127.69, P: 45.2