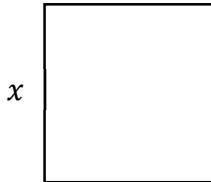


Math Worksheets

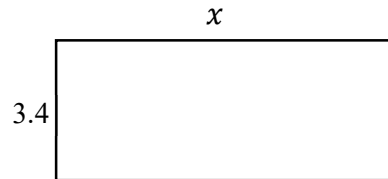
Perimeter: Find the Missing Side Lengths

✂ Find the missing side of each shape.

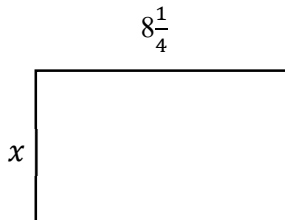
1) perimeter = 57.2



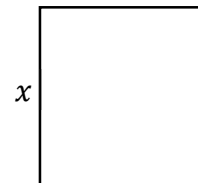
2) perimeter = 21.2




3) perimeter = 27.5



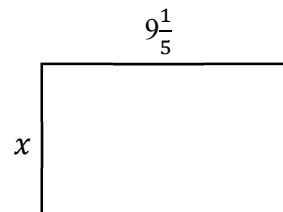
4) perimeter = 35.2



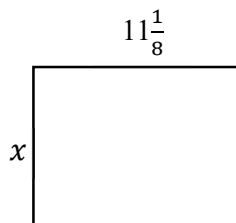
5) perimeter = 75.6



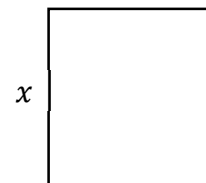
6) perimeter = 30.8



7) perimeter = 36.25



8) perimeter = 46.8



Answer Worksheets

Perimeter: Find the Missing Side Lengths

1) 14.3

3) 5.5

5) 18.9

7) 7

2) 7.2

4) 8.8

6) 6.2

8) 11.7