
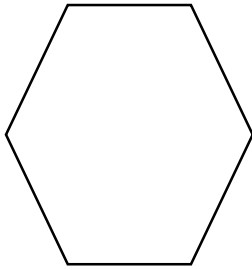


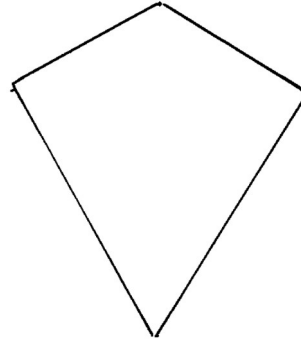
Parallel Sides in Quadrilaterals

 Write name of quadrilaterals.


1)



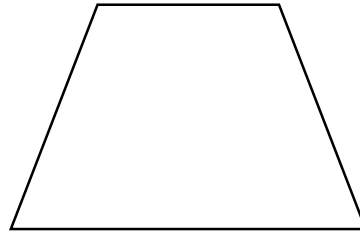
2)



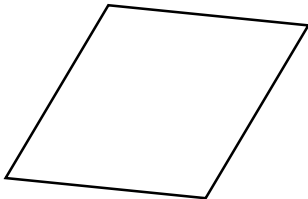
3)



4)



5)



6)



Answers of Worksheets

Parallel Sides in Quadrilaterals

1) Hexagon

3) Parallelogram

5) Rhombus

2) Kike

4) Trapezoid

6) Rectangle