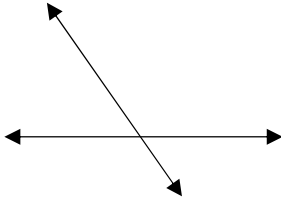


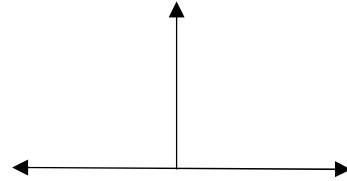
**Parallel, Perpendicular and Intersecting Lines**

✎ State whether the given pair of lines are parallel, perpendicular, or intersecting.


1)



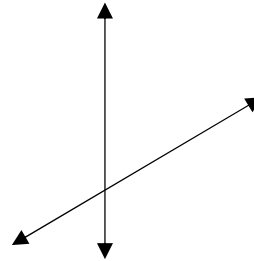
2)



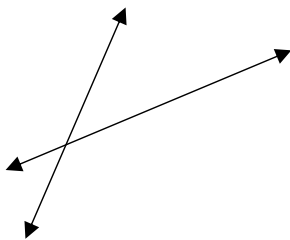
3)



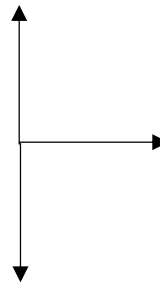
4)



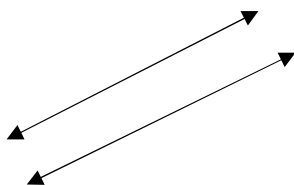
5)



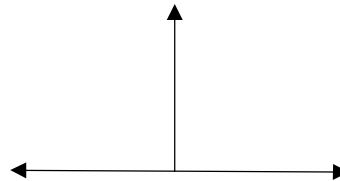
6)



7)



8)



## Answers of Worksheets

### Parallel, Perpendicular and Intersecting Lines

1) Intersection

2) Perpendicular

3) Parallel

4) Intersection

5) Intersection

6) Perpendicular

7) Parallel

8) Perpendicular