
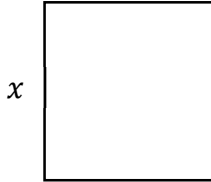


Math Worksheets

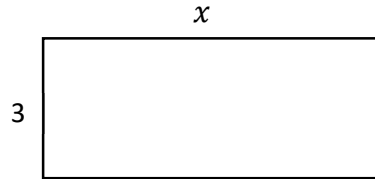
Missing Side Lengths

 Find the missing side of each shape.

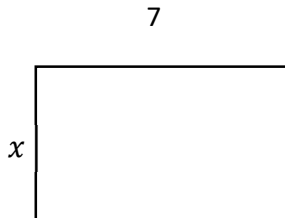
1) perimeter = 44



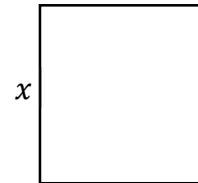
2) perimeter = 22




3) perimeter = 22



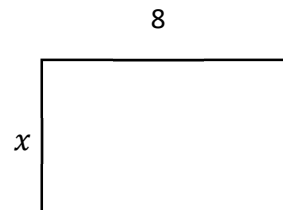
4) perimeter = 36



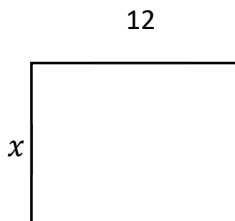
5) perimeter = 24



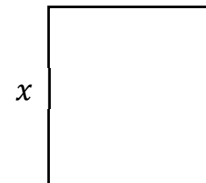
6) perimeter = 26



7) perimeter = 34



8) perimeter = 48



Answers of Worksheets

Missing Side Lengths

1) 11

3) 4

5) 6

7) 5

2) 8

4) 9

6) 5

8) 12