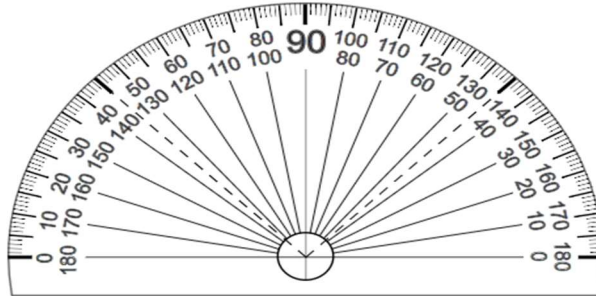


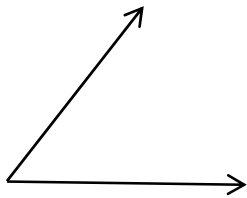
Answers of Worksheets

Measure Angles with a Protractor

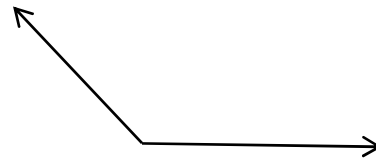
 Use protractor to measure the angles below.




1)



2)



3)



4)



 Use a protractor to draw angles for each measurement given.

5) 140°

6) 100°

7) 110°

8) 120°

9) 55°

Answers of Worksheets

Measure Angles with a Protractor

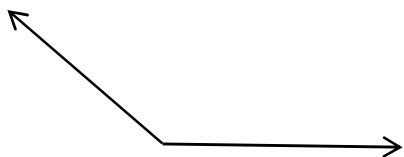
1) 50°

2) 135°

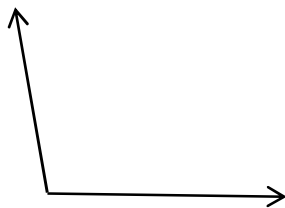
3) 20°

4) 170°

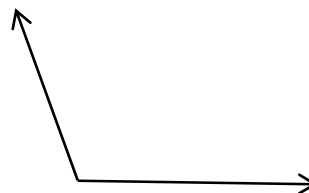
5)



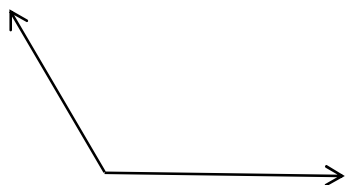
6)



7)



8)



9)

