


Math Worksheets

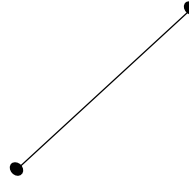
Line Segments

✎ Write each as a line, ray, or line segment.

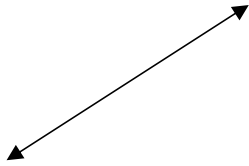
1)



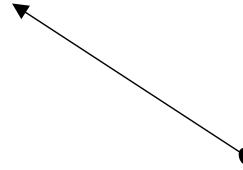
2)



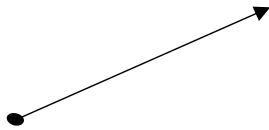
3)




4)




5)



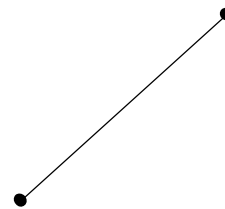
6)



7)



8)



Answers of Worksheets

Answers of Worksheets

Line Segments

- | | | |
|-----------------|---------|-----------------|
| 1) Ray | 4) Ray | 7) Line |
| 2) Line segment | 5) Ray | 8) Line segment |
| 3) Line | 6) Line | |