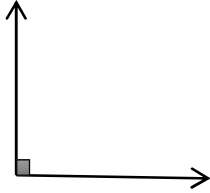


# Math Worksheets

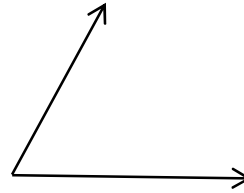
## Identifying Angles

✎ Write the name of the angles (Acute, Right, Obtuse, and Straight).

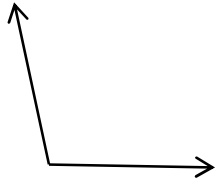
1)



2)



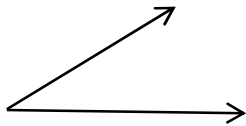
3)



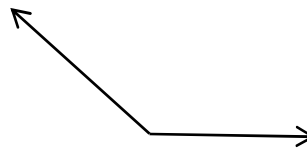
4)



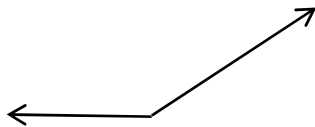
5)



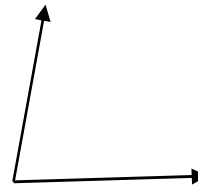
6)



7)



8)



## Answers of Worksheets

### Answers of Worksheets

#### Identifying Angles

1) Right

2) Acute

3) Obtuse

4) Straight

5) Acute

6) Obtuse

7) Obtuse

8) Acute