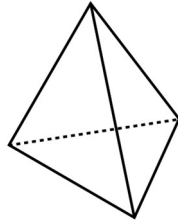


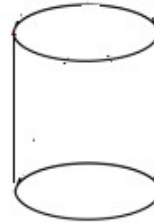
Identify Faces of Three-Dimensional Figures

✎ Write the number of faces.

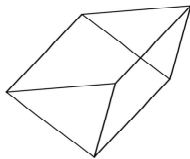
1)



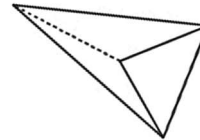
2)




3)



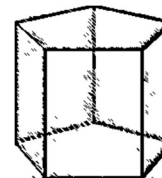
4)



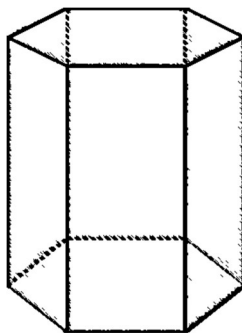
5)



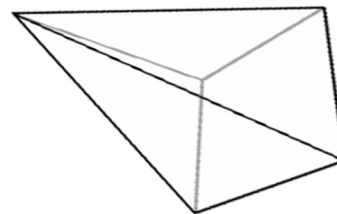
6)



7)



8)



Answers of Worksheets

Identify Faces of Three-Dimensional Figures

1) 6

4) 4

7) 8

2) 2

5) 6

8) 5

3) 5

6) 7