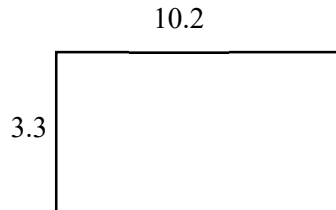


Math Worksheet

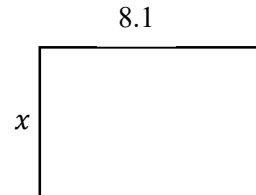
Find the Area or Missing Side Length of a Rectangle

✎ Find area or missing side length of rectangles.

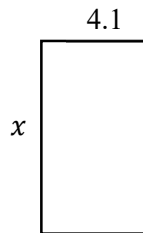
1) Area = ?



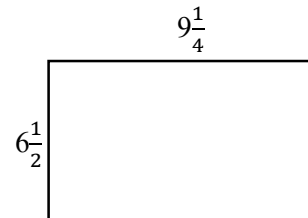
2) Area = 42.12, $x = ?$



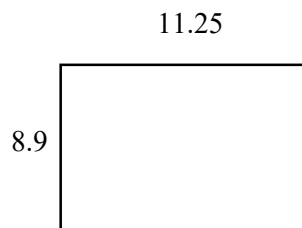
3) Area = 29.52, $x = ?$



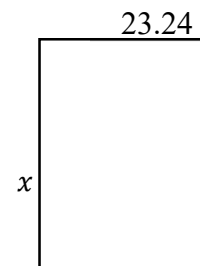
4) Area = ?



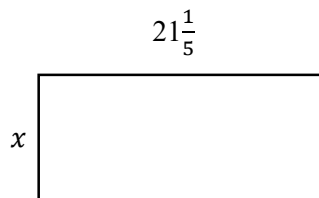
5) Area = ?



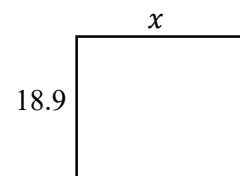
6) Area = 662.34 $x = ?$



7) Area = 216.24, $x = ?$



8) Area 336.42, $x = ?$



Answers of Worksheets

Find the Area or Missing Side Length of a Rectangle

1) 33.66

3) 7.2

5) 100.125

7) 10.2

2) 5.2

4) 60.125

6) 28.5

8) 17.8