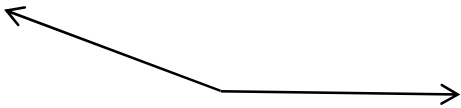


**Estimate Angle Measurements**

✎ Estimate the approximate measurement of each angle in degrees.

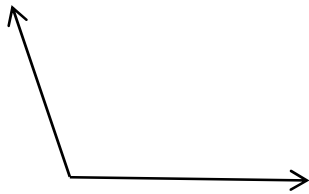
1)



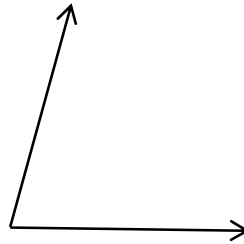
2)



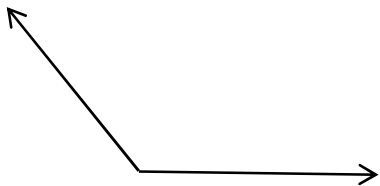
3)



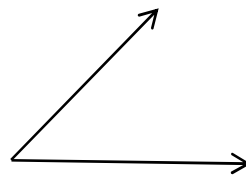
4)




5)



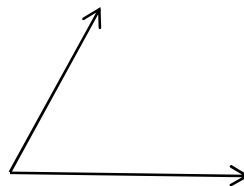
6)



7)



8)



## Answers of Worksheets

### Estimate Angle Measurements

1)  $160^\circ$

3)  $110^\circ$

5)  $130^\circ$

7)  $90^\circ$

2)  $180^\circ$

4)  $75^\circ$

6)  $45^\circ$

8)  $60^\circ$