
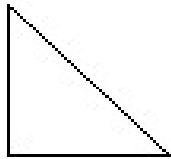


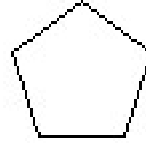
Count Lines of Symmetry

 Draw lines of symmetry on each shape. Count and write the lines of symmetry you see.

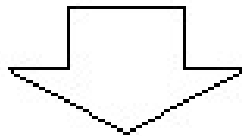
1)



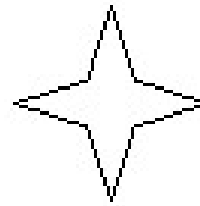
2)



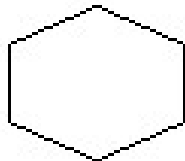
3)




4)




5)



6)



7)



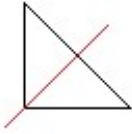
8)



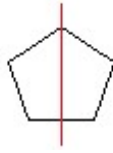
Answers of Worksheets

Count lines of symmetry.

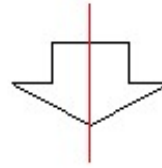
1)



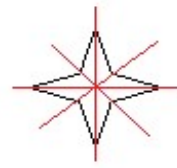
2)



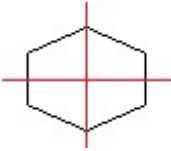
3)



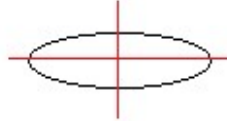
4)



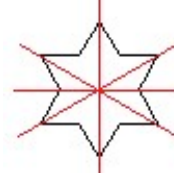
5)



6)



7)



8)

