
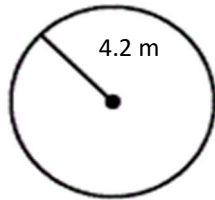


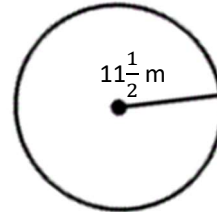
Circumference, Diameter, and Radius

 Find the diameter and circumference of circles.

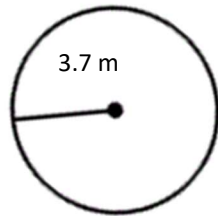
1)



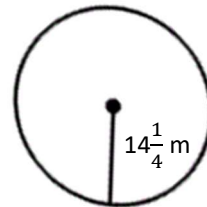
2)




3)

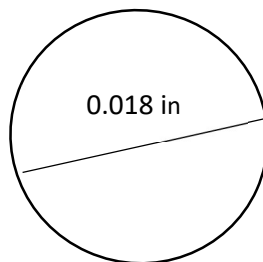


4)

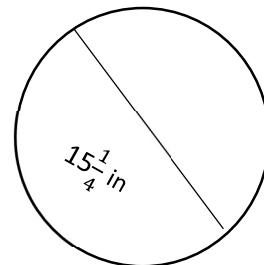


 Find the radius.

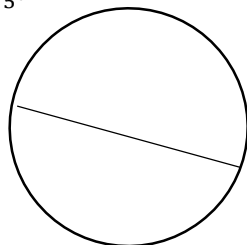
5)



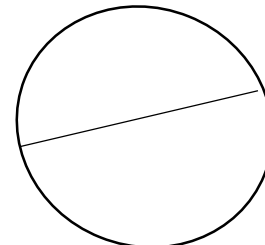
6)



7) Diameter = $16\frac{1}{5}$ ft



8) Diameter = 23.82 m



Answers of Worksheets

Circumference, Diameter, and Radius

- 1) diameter: 8.4 circumferences: 8.4π or 26.376 4) diameter: 28.5 circumferences: 28.5π or 89.49
2) diameter: 23 circumferences: 23π or 72.22
3) diameter: 7.4 circumferences: 7.4π or 23.24
5) radius: 0.009 in 6) radius: 7.625 in 7) radius: 8.1 ft 8) radius: 11.91 m