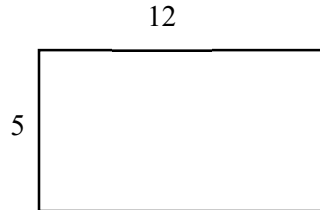


## Math Worksheets

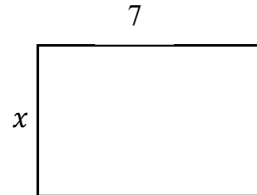
### Area or Missing Side Length of a Rectangle

✂ Find area or missing side length of rectangles.

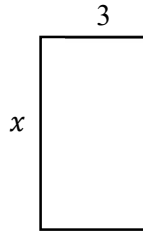
1) Area =?



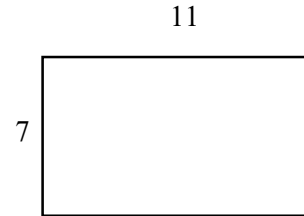
2) Area = 28,  $x$  =?



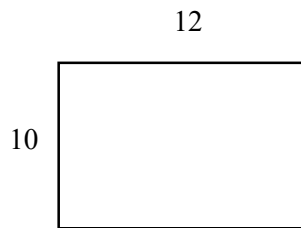
3) Area = 27,  $x$  =?



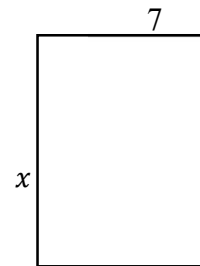
4) Area =?



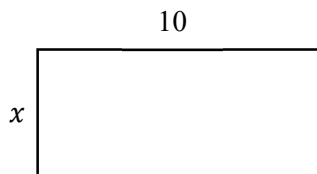
5) Area =?



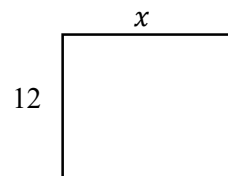
6) Area = 56  $x$  =?



7) Area = 40,  $x$  =?



8) Area = 108,  $x$  =?



## Answers of Worksheets

### Area or Missing Side Length of a Rectangle

1) 60

3) 9

5) 120

7) 4

2) 4

4) 77

6) 8

8) 9