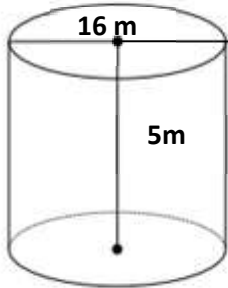


Math Worksheets

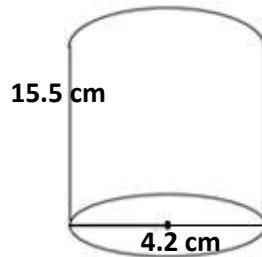
Cylinder

 Find the volume of each Cylinder. Round your answer to the nearest tenth. ($\pi = 3.14$)

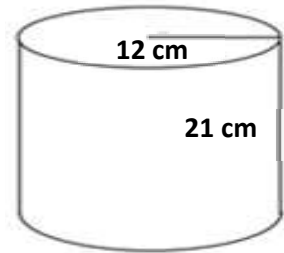
1)



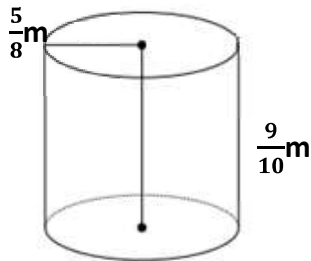
2)



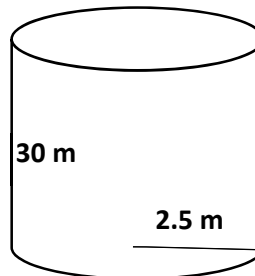
3)



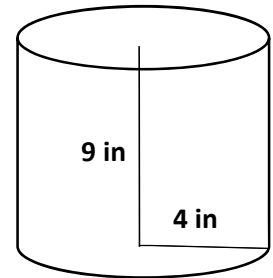
4)



5)

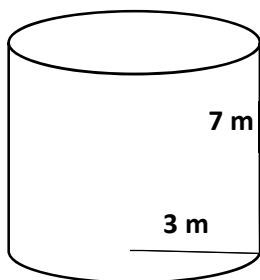


6)

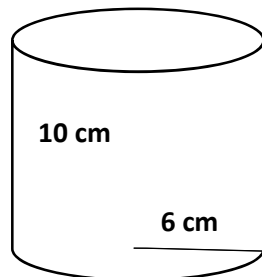


 Find the surface area of each Cylinder. ($\pi = 3.14$)

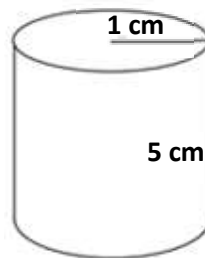
7)



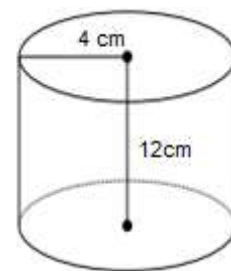
8)



9)



10)



Answers of Worksheets

Cylinder

1) $1,004.8 m^3$

2) $214.6 cm^3$

3) $9,495.4 cm^3$

4) $1.1 m^3$

5) $588.8 m^3$

6) $452.2 in^3$

7) $188.4 m^2$

8) $602.9 cm^2$

9) $37.7 cm^2$

10) $401.9 m^2$